

## Year 5/Year 6 Maths Chilli Challenge



Look at the challenges below, choose a level of chilli you want to start with. If you feel confident, have a go at the next set of questions. The answers will be published on Monday.



### Mild

Which is the largest number?

547,993      574,993      547,399

843,576      834,576      834,765

Complete the missing digits:

567,487      <      567,4\_7

542,884      <      542,\_84

73\_,945      >      738,945



### Medium

Which is the largest number?

3,564,776      3,564,706      3,564,876

2,807,546      2,887,456      2,870,546

Complete the missing digits:

4,917,458      >      4,9\_7,458

6,752,864      <      6,752,\_46

7,142,885      >      7,\_42,885



### Hot

Which is the largest number?

4,006,606      4,060,660      4,060,066

Which of these statements gives the smallest answer?

1.

$4,964,830 - 560,000$

$4,424,830 + 560,000$

2.

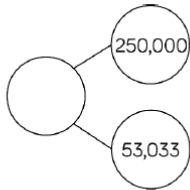
$7,873,884 - 400,400$

$7,073,484 + 400,400$

 **Spicy**

What number could the splat be covering?

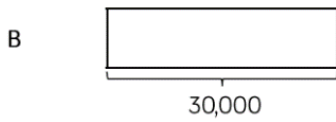
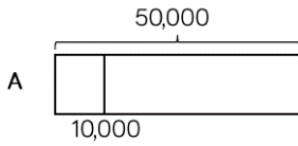
Three hundred  
and thirteen  
thousand and  
thirty-three



Greatest  $\longrightarrow$  Smallest

A house costs £250,000  
A motorised home costs £100,000  
A bungalow is priced halfway between the two.  
Work out the price of the bungalow.

Jack draws bar model A.  
His teacher asks him to draw another  
where the total is 30,000



Explain how you know bar B is inaccurate.